

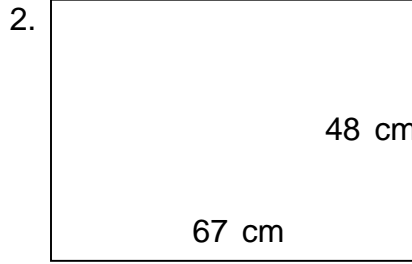
Name: _____

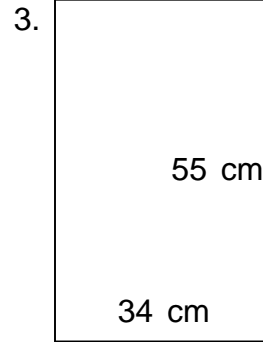
Class: _____

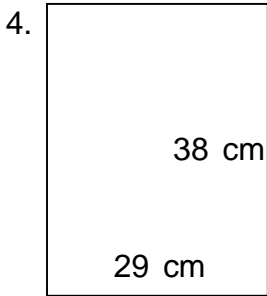
PERIMETER AND AREA

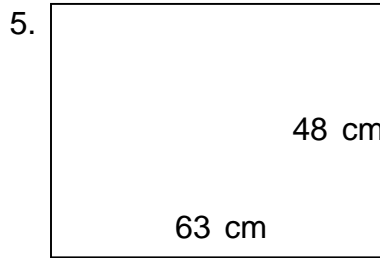
Find the perimeter and area.

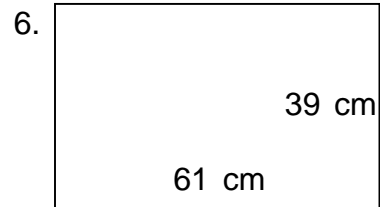


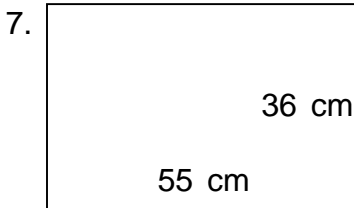


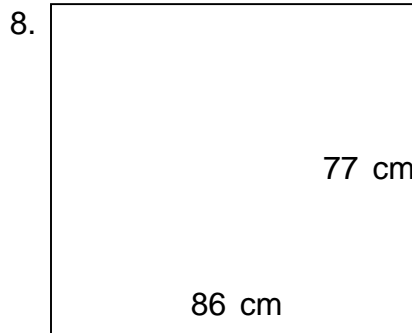


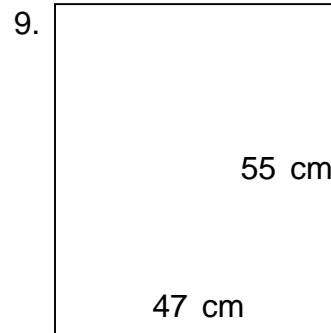












Name:

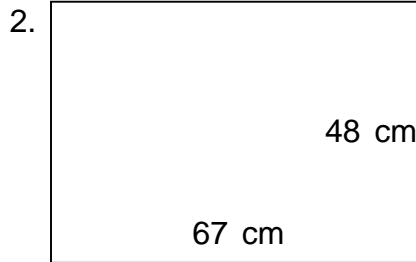
Class:

PERIMETER AND AREA

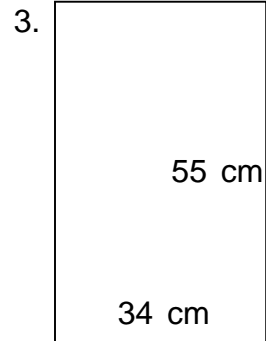
Find the perimeter and area.



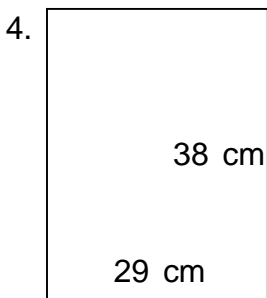
$P = 180 \text{ cm}$ $A = 1,856 \text{ cm}^2$



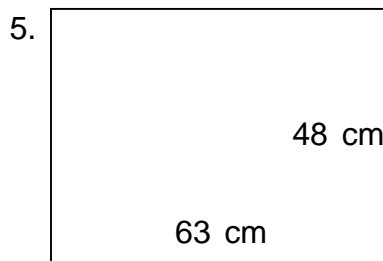
$P = 230 \text{ cm}$ $A = 3,216 \text{ cm}^2$



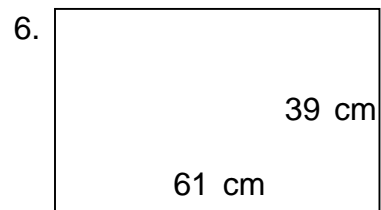
$P = 178 \text{ cm}$ $A = 1,870 \text{ cm}^2$



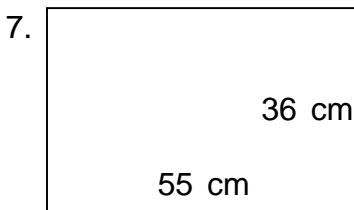
$P = 134 \text{ cm}$ $A = 1,102 \text{ cm}^2$



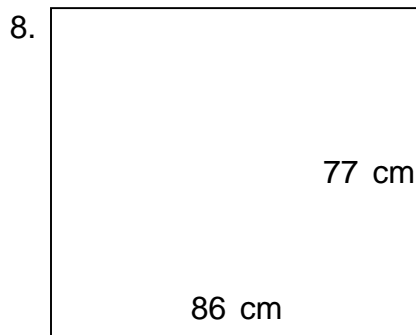
$P = 222 \text{ cm}$ $A = 3,024 \text{ cm}^2$



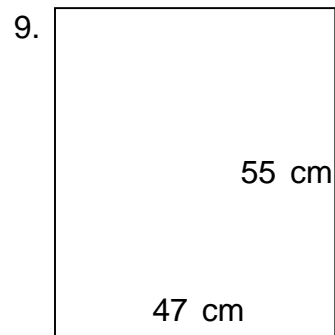
$P = 200 \text{ cm}$ $A = 2,379 \text{ cm}^2$



$P = 182 \text{ cm}$ $A = 1,980 \text{ cm}^2$



$P = 326 \text{ cm}$ $A = 6,622 \text{ cm}^2$



$P = 204 \text{ cm}$ $A = 2,585 \text{ cm}^2$